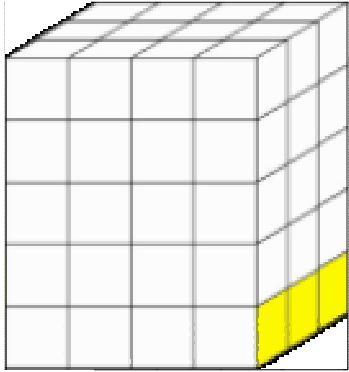
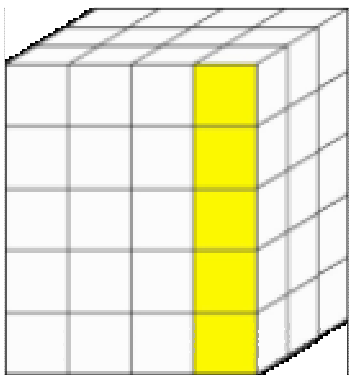


# VOLUME FORMULA FLIPBOOK DIRECTIONS:

Cut out each page of the flipbook and arrange in order from smallest to largest. Glue the pages together along the narrow top tabs. Complete the last page to find the volume of the prism.

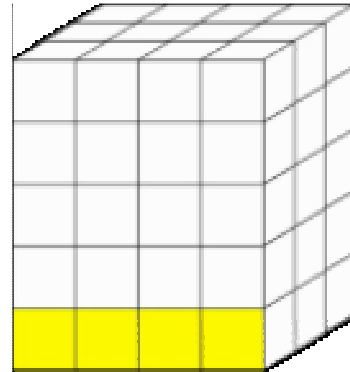


width

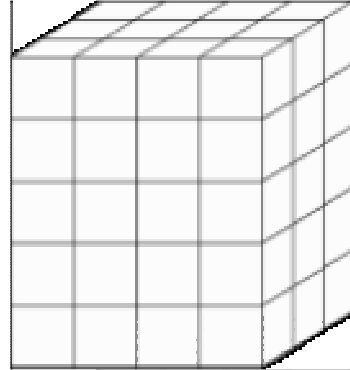


height

## Volume of a Rectangular Prism



length



$$l \times w \times h = v$$

$$\underline{\quad} \times \underline{\quad} \times \underline{\quad} = \underline{\quad}$$

volume